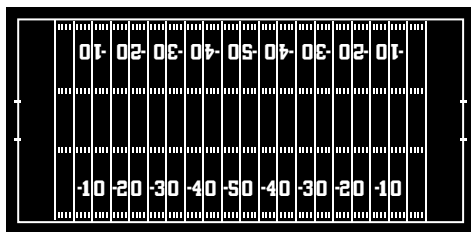


Identify These Shapes

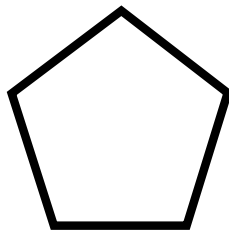
Draw a line from the shape to its label.



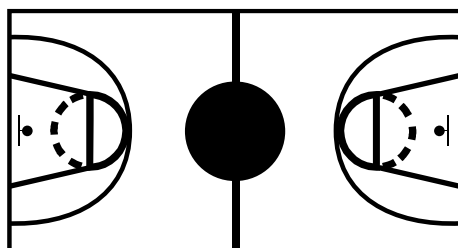
Football Field



Soccer Ball



Home Plate



Basketball Center Court


sphere

rectangle

pentagon

circle

SPORTS MATH MAT



Why are basketball players such messy eaters?

Answer: They always dribble!

Find A Word

F	O	O	T	B	A	L	L	K	G	Tee
M	Q	T	E	A	M	R	W	S	O	Team
J	G	B	A	S	E	B	A	L	L	Golf
X	S	Y	T	K	W	A	T	D	F	Football
H	O	C	K	E	Y	R	E	S	E	Hockey
C	C	B	I	T	E	E	N	C	F	Baseball
O	C	E	A	B	P	R	N	O	I	Field
U	E	G	O	A	L	K	I	R	E	Court
R	R	E	A	L	M	N	S	E	L	Basketball
T	W	V	H	L	S	R	C	F	D	Soccer
										Score
										Tennis
										Goal

Which Golfer Won?

(Lowest score wins)

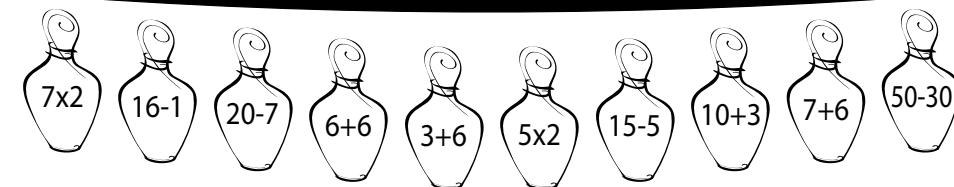
Mike	3	4	5	3	3	6	3	3
Tony	2	4	4	4	3	4	3	4



Why was Cinderella such a poor golfer?

Answer: Her coach was a pumpkin!

Color all the bowling pins greater than 12.



SCORE

96 82

Is this score more likely to be a basketball game or a football game? Explain your thinking.



What can you think of that is the same size as a soccer ball, but weighs more?
What can you think of that is lighter than a baseball?



What kind of cats like to go bowling?

Answer: alley cats



Casey bought 5 baseballs for \$6.00 each. He sold three of them for \$7.50 and two of them for \$6.25. How much profit did Casey make? Show your work.

Draw a line of symmetry through each sports item above.

Ken has 42 baseball cards. He wants to share them with 6 of his friends. How many will each get? How many will Ken keep?

