



If John begins baking pizzas at 9:00 a.m., and bakes 6 pizzas per hour, how many pizzas will be done at 2:30 p.m.?

How many different arrays can you show using 18 pizzas?

You need to order pizzas for a party. Twenty-four people will be at the party. Each person will eat 2 slices. How many pizzas will you need to order if each pizza has:

8 pieces? _____

10 pieces? _____

12 pieces? _____

Will there be any leftovers? _____





HOW MANY SLICES?

The hundreds digit is larger than the ones digit. The tens digit is larger than the hundreds and it is odd. What might the number be?



FAMILY PIZZA NIGHT

USD 259 • LINKING TO LEARNING MATH MAT • INTERMEDIATE



Shade $\frac{3}{4}$ of the pizza above. What fraction is not colored? _____


Can you name the fraction in a different way? _____

THE ANSWER IS 14 PIECES. WHAT IS THE QUESTION?

Using the graph, what is the most popular pizza?

Do more people like sausage or pineapple?

Which flavor is less popular than pineapple?



WHO LIKES WHAT?

Jackie, Jamie and Jesse each like a different type of pizza. The pizza types are **pepperoni, cheese and pineapple**. Jamie and Jackie are good friends with the person who likes pepperoni pizza. Jackie likes the pizza that has an even number of letters. Jamie doesn't like meat on her pizza.

Jackie likes: _____

Jamie likes: _____

Jesse likes: _____



Write down the number of pizzas you would like to order. _____ If you cut each pizza into fourths, how many slices will you have? _____

Show your work on the back.

Sam bought 1 pizza for \$3.65. He gave the waiter \$5.00. How much change should he receive?



School: _____

Name: _____ Grade: _____

